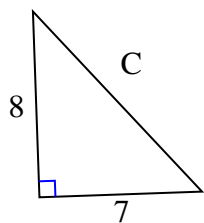




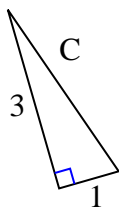
Find the value of 'C' round your answer to the nearest hundredth.

Answers

1)



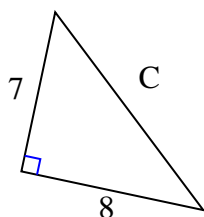
2)



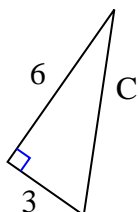
3)



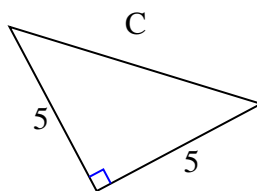
4)



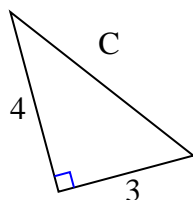
5)



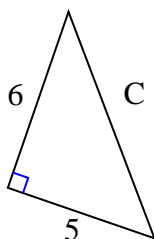
6)



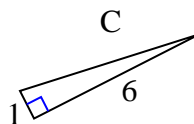
7)



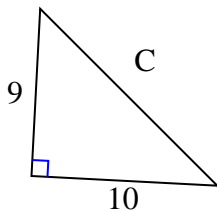
8)



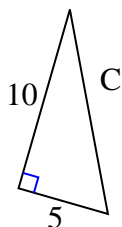
9)



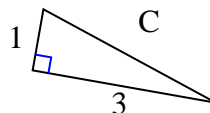
10)



11)



12)

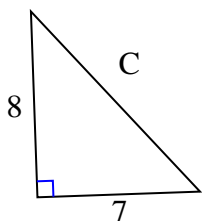


1. _____
2. _____
3. _____
4. _____
5. _____
6. _____
7. _____
8. _____
9. _____
10. _____
11. _____
12. _____



Find the value of 'C' round your answer to the nearest hundredth.

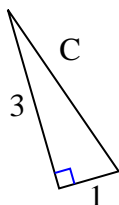
1)



$$64 + 49 = 113$$

$$\sqrt{113} = 10.63$$

2)



$$9 + 1 = 10$$

$$\sqrt{10} = 3.16$$

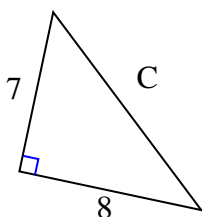
3)



$$49 + 4 = 53$$

$$\sqrt{53} = 7.28$$

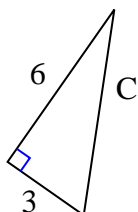
4)



$$49 + 64 = 113$$

$$\sqrt{113} = 10.63$$

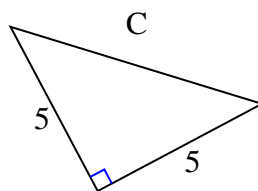
5)



$$36 + 9 = 45$$

$$\sqrt{45} = 6.71$$

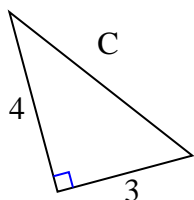
6)



$$25 + 25 = 50$$

$$\sqrt{50} = 7.07$$

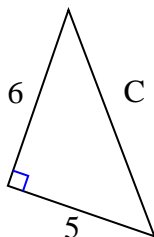
7)



$$16 + 9 = 25$$

$$\sqrt{25} = 5$$

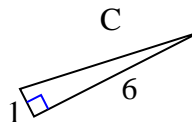
8)



$$36 + 25 = 61$$

$$\sqrt{61} = 7.81$$

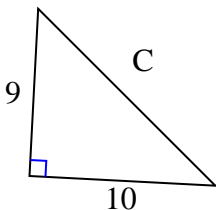
9)



$$1 + 36 = 37$$

$$\sqrt{37} = 6.08$$

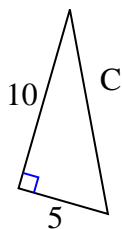
10)



$$81 + 100 = 181$$

$$\sqrt{181} = 13.45$$

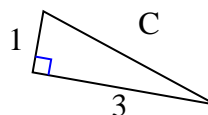
11)



$$100 + 25 = 125$$

$$\sqrt{125} = 11.18$$

12)



$$1 + 9 = 10$$

$$\sqrt{10} = 3.16$$

Answers

1. 10.63
2. 3.16
3. 7.28
4. 10.63
5. 6.71
6. 7.07
7. 5
8. 7.81
9. 6.08
10. 13.45
11. 11.18
12. 3.16